





SINDHI HIGH SCHOOL, K.K. ROAD BENGALURU -01

WORKSHEET-3 (2022-23)

SUBJECT: ENGLISH



Name: _____

Class: I A/ B/ C

Roll no: _____

Time: 1 hr

No. of sides printed: 3

SECTION - A READING

1) Read the following passage carefully:

I am a little fox. My name is Ben. I am from the dog family. I am brown in colour.
I live in the zoo with my family. I am very clever and run very fast.

a) Complete the following:

(1x3=3)

1. I am a little _____.

2. I am _____ in colour.

3. I run very _____.

b) State whether the statements are True or False:

(1x2=2)

1. I am from the cat family.

2. I live in the zoo with my family.

SECTION - B CREATIVE WRITING AND GRAMMAR

(1X3=3)

A) See the picture and write 3 sentences on it:



B) Write the following in alphabetical order:

(1x2=2)

1. orange, red, pink, blue

2. roof, door, window, floor

C) Write one rhyming word for the following:

(1x4=4)

1. mug _____

2. well _____

3. look _____

4. pan _____

SECTION - C LITERATURE

A) Answer the following:

(1x4=4)

1. What was the puddle made of ?

2. What should we do to be healthy ?

3. Why did Bholaram go to town ?

4. Which body gives away soon ?

B) Underline the correct answer :

(1x2=2)

1. Dancing and aerobics keeps us fit and (fine / lazy)

2. Bholaram went to town every (month / week).



SINDHI HIGH SCHOOL. K.K.ROAD BENGALURU-01

Worksheet-3(2022-2023)

Subject: II Language Kannada

Class: 1, Sec: _____

Date: 08 /11/2022

Name: _____

Roll no: _____



Time: 1 Hour

Max Marks:20

No of printed sides: 4

I. Choose the correct letter and fill in the blanks. (½x 4=2)

1) ದಾ _____ (ರ, ಲ)

2) ಚೀ _____ (ರಿ, ಟಿ)

3) ನಾ _____ (ಇ, ಯಿ)

4) ಸಿ _____ (ಹಿ, ನಿ)

II. Write meanings in english. (1x2=2)

1) ಬಾಲಕ = _____

2) ಬೀಗ = _____

III. Pick out the odd one. (½ x2=1)

1) ರಥ ಮರ ಜಾಣ ತಡ : _____

2) ಲೀಲ ಘನ ರೀತಿ ವೀರ : _____

IV. Re-arrange the jumbled words. (½ x4 =2)

1) ತಾಯಿಮಿ: _____

3) ಗಕಾದ: _____

2) ಕಟನಾ : _____

4) ರದಸ : _____

V. Make 3 words from the grid.

(1x3=)

ರಾ	ಕ	ಮ	ಕೀ
ಹಿ	ಸಿ	ಟ	ಳಿ
ಲ	ಗಾ	ನ	ದಿ
ಬಾ	ವಿ	ಗಿ	ಡ

VI. Write the meaningful words for the given letters:

(½ x4=2)

1. ಕಾ

→ ಯಿ

→ ಲ

① _____

② _____

ಗಾ

→ ಡಿ

→ ಲ

① _____

② _____

Count and write the numbers in kannada.

($\frac{1}{2} \times 4 = 2$)

1



2.



3.




4



VIII. Identify the pictures and write the words in kannada. (1x 3=3)

1



2.



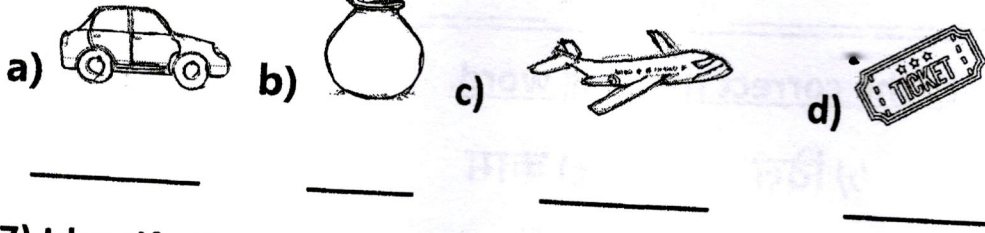
5. Circle only इ की मात्रा words.

(2)

हवा, गिरगिट, बटन, कमल, डिबिया, तिनका, माता, डलिया

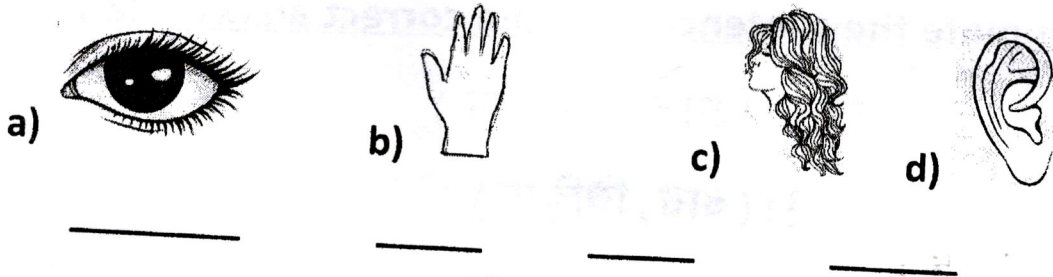
6) Identify the given picture and write their names in Hindi.

(2)



7) Identify the parts of the body and write their names in Hindi.

(2)



8. Read the given passage and complete the sentences. (2)

डाकिया आया। शिखा का खत लाया। विभा सितार रख। खत का जवाब लिख। लिफ़ाफ़ा पर टिकट लगा। विकास मिठाई खा।

a) डाकिया _____।

b) शिखा का _____ लाया।

c) _____ पर टिकट लगा।

d) _____ मिठाई खा।

9. Circle the odd one out.

(2)

- a) राम नाम काम काल b) खाना गाना दिल आना
c) चिड़िया बिन गिन दिन d) हिल रात मिल दिल

10. Make sentences.

(2)

a) गिलास - _____

b) नाव - _____



SINDHI HIGH SCHOOL

K.K. ROAD BENGALURU -01 (2022-2023)

WORKSHEET-3

SUBJECT: EVS



Name: _____

Class: I A/ B/ C

Roll no: _____

Date: 4/11/2022

Marks: 20

Time: 8.00-9.00 AM

No of sides printed: 3

I. Fill in the blanks using the given words :

(1/2x4=2M)

(community, strangers, eyes, doctor)

1. A _____ treats us when we are sick.
2. Our _____ help us to see things around us.
3. Do not talk to _____.
4. The people who help us are known as _____ helpers .

II. Match the following:

(1/2x4=2M)

- | | | |
|-----------|-----|----------|
| 1. skin | () | a) smell |
| 2. tongue | () | b) hear |
| 3. nose | () | c) feel |
| 4. ears | () | d) taste |

III. Jumbled letters:

(1x3=3M)

1. onse - _____
 :
2. feli- _____
3. dahn - _____

IV. Write true or false for the given sentences :

(1/2x4=2M)

1. We must wear dirty clothes : _____
2. A carpenter makes furniture : _____
3. The elbow helps to bend our leg : _____
4. The ear and nose never stop growing : _____
 :

V. Who am I ?

(1x3=3M)

1. I stitch clothes : _____
2. I deliver letters : _____
3. I repair taps : _____

VI. To whom should I go ?

(1x2=2M)

1. My shoe is torn : _____
2. My car is stolen : _____

VII. Answer the following questions :

(1x3=3M)

Q1. Who is a veterinary doctor ?

Q2. How do our legs help us ?

Q3. What is the work of a gardener ?

VIII. Draw, name and colour any 3 sense organs :

(3M)

XXXXXXXXXXXXXXXXXXXXXXXXXXXXXXXXXXXX



SINDHI HIGH SCHOOL, K.K. ROAD BENGALURU - 01

SUBJECT - MATHEMATICS

Worksheet 3



CLASS - 1 A/B/C


TIME - 1hr

Date: 2.11.2022

MARKS - 20


Name - _____ Roll no - _____ No of printed sides - 03

1. Count the sleeping lines, standing lines and slanting lines. (3)

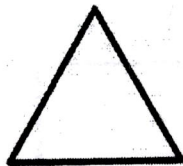


Sleeping lines - _____ Standing lines - _____ Slanting lines - _____


2. Answer the following. (3)



- a) I am a _____
b) I have _____ sides.


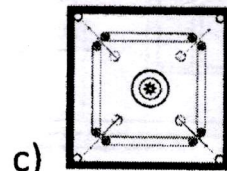
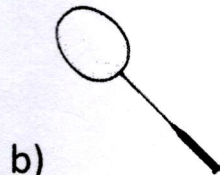


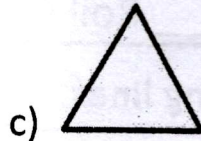
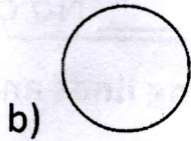
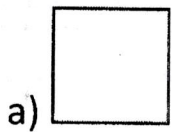


- a) I am a _____
b) I have _____ sides.


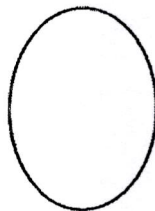


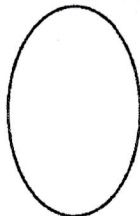


- a) I am a _____
b) I have _____ corner.

3. Match the following. (2)



4. Colour the squares red, rectangles green and ovals blue. (3)



(2)

5. Continue the patterns.

(3)



6. Continue the number pattern.

(3)

a) 5, 10, 15, 20 - _____

b) 56, 54, 52, 50 - _____

c) 45, 46, 47, 48 - _____

7. Complete the alphabetical pattern.

(3)

a) AB, BC, CD, DE - _____

B) Aa, Bb, Cc, Dd - _____

C) abc, def, ghi, jkl - _____

(3)



SINDHI HIGH SCHOOL, K.K. ROAD BENGALURU - 01

WORKSHEET-2 (2022-23)

SUBJECT : ENGLISH

Name: _____

Class: I A/ B/ C

Roll no: _____



Marks: 20

Time: 1 hr

No of sides printed: 3

SECTION-A READING

1) Read the following passage carefully:

I saw a bear in the jungle. It was very big. The bear was walking slowly. It had a short tail. The bear was like a big soft pillow. I wanted to hug the bear.

a) Complete the following:

(1x3=3)

1. I saw a _____ in the jungle.
2. The bear was walking _____.
3. The bear was like a soft _____.

b) State whether the statements are True or False:


(1x2=2)

1. The bear had a short tail.
2. The bear wanted to hug me.

SECTION-B CREATIVE WRITING AND GRAMMAR

A) Write 3 sentences about, "A parrot."

(1X3=3)



Grammar

B) Fill in the blanks with 'a' / 'an' :

(1x2=2)

1. I live in _____ big house.
2. My grandmother is _____ old woman.

C) Choose the correct blends and digraphs from the help box to make the correct word: (sh, gr, th, bl)

(1x4=4)

1. _____oe
2. _____ack
3. _____in
4. _____apes

SECTION-C LITERATURE

III A. Answer the following:

(1x4=4)

1. What did they see at the market?

Ans. _____

2. Write the names of any 2 healthy foods that you eat.

Ans. _____

3. What was Raghu's clever idea?

Ans. _____

4. How many pieces of cake did Raghu's brother eat?

Ans. _____

B. Underline the correct word from the bracket:

(1x2=2)

1. I went to the market with my(father/ mother).

2. Raghu solved the cake problem (easily/ with difficulty).



Worksheet 2

CLASS – 1 A/B/C

TIME – 1hr



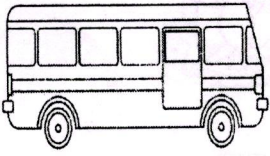
Date: 22.9.2022

MARKS – 20

Name - _____ Roll no - _____ No of printed sides- 02

1. Circle the correct word. (2)


- a) बस / छत b) कटहल / अजगर c) मगर / भवन d) टम्टम / सरकस



2. Write the rhyming words. (2)

- a) कल - _____ b) कब - _____
c) मगर - _____ d) महल - _____

3. Fill in the blanks. (2)





- a) न__ न b) __ लश c) अ__ कन d) अद__ क

4. Complete the sentence with the correct word. (2)

- a) _____ तक पढ़। (ईख / दस) b) _____ पर चढ़। (मटर / रथ)
c) _____ मत पकड़। (पवन / मगर) d) _____ उधर रख। (उपवन / थरमस)

5. Identify the given picture and complete the sentence. (2)

- a) _____ उधर रख।  b) _____ तक चल। 

- c) _____ पर मत चल।  d) _____ पकड़। 

6. Draw the picture for the given word. (2)


7. Complete the following. (3)

त _____ द _____ ध _____

_____ फ _____ ब _____ भ _____

य _____ र _____ व _____ श _____ ष _____ ह _____

8. Do as directed. (3)



म		

ब	

क		

9. Write any one word for the given letter. (2)

Example च - चढ़, चख

a) म - _____ b) आ - _____ c) न - _____ d) क - _____



SINDHI HIGH SCHOOL, K.K.ROAD BENGALURU -01

Worksheet- 2 (2022-2023)

Subject : II Language kannada

Class: 1, Sec: _____

No of Printed sides – 03

Time : 1Hour

Date: 21- 9-2022

Max Marks : 20

Name: _____

Rollno: _____

I Choose the correct letter and fill in the blanks. (½x4=2)

1) ಕ _____ ಗ (ಡ , ಧ, ಢ)

2) ಆ _____ ರಣ (ಬ, ಘ, ಭ)

3) _____ ಟ (ಉ, ಒ, ಊ)

4) _____ ಗ (ಖ , ಕ , ಡ)

II Re arrange the jumbled letters. (½x4=2)

1) ವಹಳ : _____

2) ಕಳಜ : _____

3) ಗಪಣ : _____

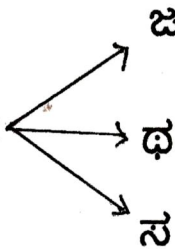
4) ದವನ : _____

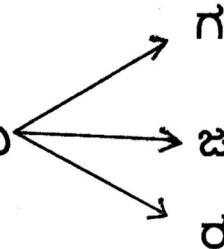
III Pick out the odd one. (½x2=1)

1) ಸರ , ಸದನ , ಹಣ , ಸಮಯ : _____

2) ಜನ , ಢಣಢಣ , ಜಯ , ಜಲ : _____


IV Write the meaningful words for the given letters . (½x6=3)

1) ರ  _____

2) ಮ  _____


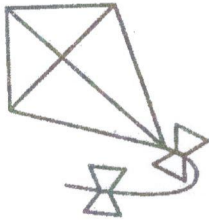
V Count and write the numbers in Kannada .

($\frac{1}{2} \times 4 = 2$)



VI Match the pictures to the words.

($\frac{1}{2} \times 4 = 2$)



ಸಮಯ



ಹಯ

ಪಟ

ಭಟ

VII Identify the pictures and write the words in Kannada.

($1 \times 2 = 2$)



III Write the meanings in kannada .

(1x2=2)

1) POT = _____

2) MEDAL = _____

IX Make two words from the grid.

(1x2=2)

ಏ	ಚ	ಟ
ಒ	ಛ	ಠ
ಕ	ಝ	ಞ

1) _____

2) _____

X Observe the pictures and write the sentences in Kannada.

(1x2=2)

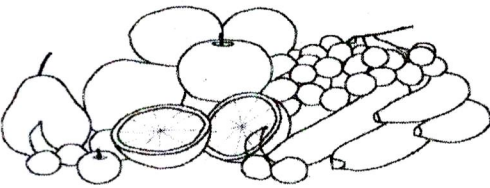
1)




ನ ಮಗ



2)



ಛ





SINDHI HIGH SCHOOL

K.K. ROAD, BENGALURU -01(2022-2023)

WORKSHEET - 2

SUBJECT: Math

Name: _____

Class: IA/ B/ C

Roll no: _____

Date: 20/ 9 / 2022

Marks: 20

Time: 8.00-9.10 AM

No of sides printed: 3

I Write the place value of the underlined digit:

2M

a) 45: The Place value of 5 is _____.

b) 69: The Place value of 6 is _____.

c) 81: The Place value of 1 is _____.

d) 24: The Place value of 2 is _____.

II Fill in the blanks:

4M

a) $9 + 2 =$ _____

b) $4 + 0 =$ _____

c) $13 + 3 =$ _____

d) $11 + 5 =$ _____

e) $20 + 6 =$ _____

f) $7 + 1 =$ _____

g) $2 + 8 =$ _____

h) $5 + 0 =$ _____

III Expand the number:

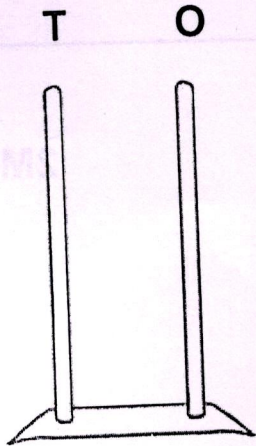
2M

a) $29 =$ _____ tens and _____ ones.

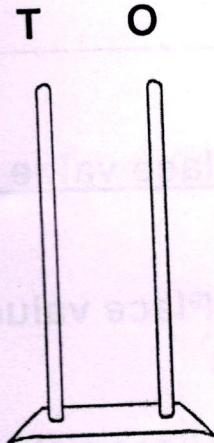
IV Draw beads on the abacus to show the number:

2M

a) $32 =$

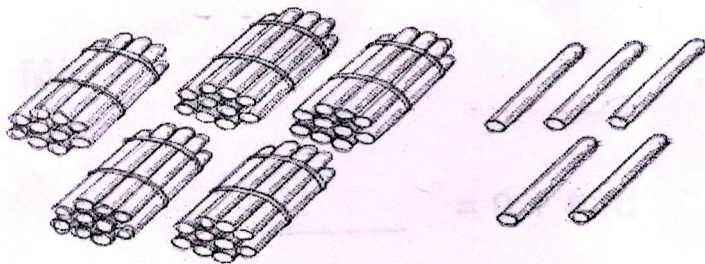


b) $17 =$

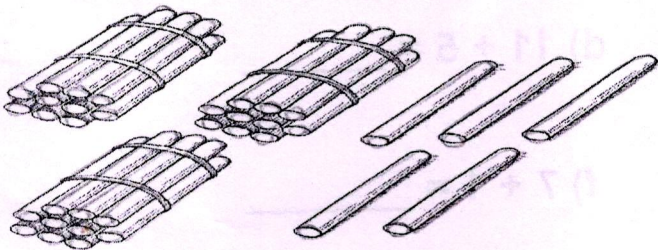


V. Count in tens and ones:

2M



$=$ _____ tens and _____ ones




$=$ _____ tens and _____ ones

VI. Add using number line:

2M

a) $2 + 4 =$ _____






SINDHI HIGH SCHOOL K.K. ROAD BENGALURU -01

WORKSHEET-2(2022-23)

SUBJECT: EVS



Name: _____

Class: I A/ B/ C

Roll no: _____

Date: 23/9/2022

Marks: 20

Time: 1 hr

No of sides printed: 2

QI. Circle the odd one out:

(1*3=3)

1. bucket, soap, mug, sleep
2. matchstick, toy, knife, scissors
3. cook, kitchen, food, pillow

QII. Who am I:

(1*3=3)

1. You take bath here _____
2. I am the head of the school _____
3. You rest and sleep here _____

QIII. Match the Following:

(1*4=4)

- | | | |
|-------------|-----|-------------|
| 1. library | () | a) gurukuls |
| 2. watchman | () | b) books |
| 3. teacher | () | c) guards |
| 4. school | () | d) teaches |

QIV. Jumble letters:

(1*4=4)

1. e a c l n- _____
2. e a m l s- _____
3. t u s d y- _____
4. o u h s e- _____

QV. Answer the following questions:

(2*2=4)

9

Q1. Why do we need a house?

A1. _____

Q2. Write any two safety rules to be followed at school.

A2. _____

QVI. Draw any two objects used in:

(1/2*4=2)

Kitchen	Living Room

All the Best

125