




SINDHI HIGH SCHOOL, K.K. ROAD BENGALURU - 01

Worksheet 6 (2022- 2023)

SUBJECT – MATH



CLASS – 1 A/B/C

MARKS – 20

Date: 30.3.2023

Time : 1hr

Name - _____ Roll no - _____ No of printed sides - 03


1) Maya and Riya went to a stationary shop. Help them to know how much money they have to pay for the stationary, if they get the stationary. (2)



Rs 50



Rs 25



Rs 30



Rs 15



Rs 10

a) Pencil box and colour pencil

b) Exam pad and pencil

2) Rani goes to a mall and buys few things. The items and their rates are as follows. (2)

A pair of shoes

A T shirt

balloons

A pair of bangles


A bottle



Rs 200



Rs 100



Rs 60



Rs 75



Rs 50

Write the names of objects that Rani can buy exactly for:

a) Rs 50

b) Rs 100

c) Rs 75

d) Rs 200

3) Add and write the answer. (2)

a)  +  = Rs _____

b)  +  = Rs _____

c)  +  = Rs _____

d)  +  +  +  = Rs _____

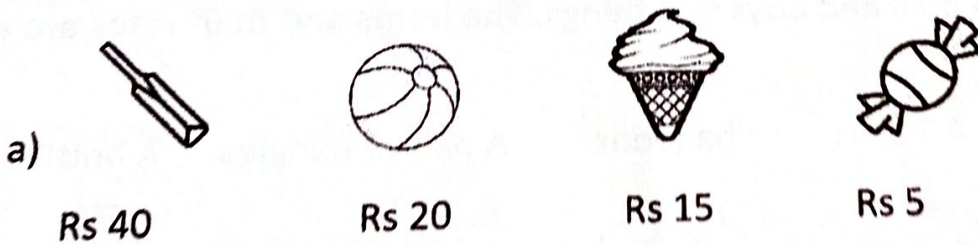
4) (a) Identify the 2 rupees coin from the following. Put (✓) mark ($\frac{1}{2} \times 2 = 1$)



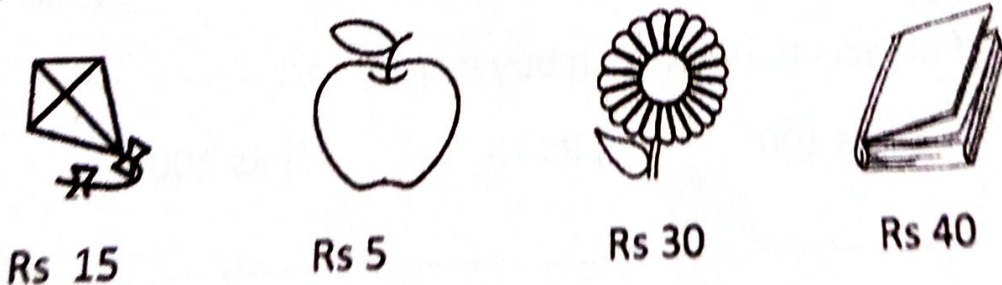
(b) Identify the 5 rupees note from the following. put (✓) mark



5) Circle any two articles that you can buy for Rs 35 ($\frac{1}{2} \times 2 = 1$)



b) Circle any two articles that you can buy for Rs 20



6) Fill in the blanks (2)

- a) The symbol for rupees is _____
- b) 1 rupee = _____ paise.
- c) Multiplication is repeated _____
- d) In multiplication, the sign used is _____

7) Match the following. (2)

- a) 5×6 b) 2×5 c) 3×2 d) 1×8

- a) 8 b) 6 c) 30 d) 10

8) Observe the given figure and answer the following. (4)



How many groups? _____

How many groups? _____

How many in each group? _____

How many in each group? _____

Write as addition - _____

Write as addition - _____

Write as multiplication - _____

Write as multiplication - _____

9) Multiply (3)

- a) T O b) T O c) T O d) T O e) T O f) T O

$\begin{array}{r} 1 \\ \times 7 \\ \hline \end{array}$	$\begin{array}{r} 1 \\ \times 9 \\ \hline \end{array}$	$\begin{array}{r} 5 \\ \times 5 \\ \hline \end{array}$	$\begin{array}{r} 2 \\ \times 8 \\ \hline \end{array}$	$\begin{array}{r} 10 \\ \times 1 \\ \hline \end{array}$	$\begin{array}{r} 2 \\ \times 5 \\ \hline \end{array}$
--	--	--	--	---	--

10) Write the repeated addition form. (1)

a) $2 \times 6 = \underline{\quad} + \underline{\quad}$

b) $3 \times 5 = \underline{\quad} + \underline{\quad} + \underline{\quad}$


(page 3)



SINDHI HIGH SCHOOL, K K ROAD BENGALURU

Work sheet - 6 (2022-2023)

Subject : II Language kannada



Class: 1, Sec: _____

No of Printed sides - 3

Max Marks: 20

Date: 31- 3 - 2023

Time: 1 Hour

Name _____

Reading time: 8- 8:10 AM

Roll no: _____

I Complete the following

1/2x6=3

೧೦೩	ಶಿ	_____	ಫ್ಲೆ	ಫಿ
_____	ಫ್ಲೆ	_____	ಫ್ಲೆ	ಫಿ
_____	ಫಿ	_____	ಫಿ	_____

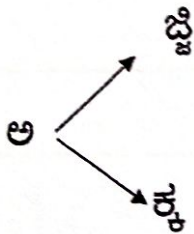
II Choose the correct letter and fill in the blanks

1/2x6=3

- | | |
|-----------------------------|-----------------------------|
| 1. ಹ _____ (ಳ್ಳು , ಳ್ಲು) | 4. ಕ _____ ರಿ (ತ್ರ , ಢ್ಢ) |
| 2. ಕ _____ ರ (ಮ್ಮ , ಮ್ಮಾ) | 5. ಹ _____ (ಗ್ಗ , ಳ್ಳ) |
| 3. ಕ _____ ಡಿ (ಸ್ಸ , ನ್ನ) | 6. ಬೆ _____ (ಕ್ಕು , ಳ್ಲು) |

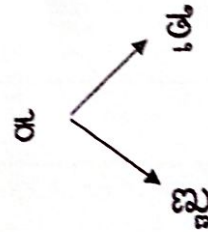
III With the help of the given letters frame words

1/2x4=2



1. _____

2. _____



1. _____

2. _____

IV Choose the correct word and fill in the blanks

$\frac{1}{2} \times 4 = 2$

1. ಆ ಕೋತಿಯ ಬಾಲ _____ ಉದ್ದವಿತ್ತು. (ತುಂಬಾ , ಚೂರು)
2. ಒಂದು ಕೋತಿ _____ ಮೇಲೆ ಕುಳಿತಿತ್ತು. (ಗಿಡದ , ಮರದ)
3. ಕೋತಿಗೆ _____ ಆಯಿತು. (ಕಚಗುಳಿ, ಸಂತೋಷ)
4. ಒಂದು ಅಳಿಲು _____ ಅಲ್ಲಿಗೆ ಬಂದಿತು .

(ಕುಣಿದಾಡುತ್ತಾ , ನಡೆಯುತ್ತಾ)

V Make four meaningful words from the grid

$1 \times 4 = 4$

ಅ	ಗ	ಳ್ಳೆ
ಕ	ಸೊ	ಡ್ಡ
ಜ್ಜಿ	ತ್ತೆ	ಪ್ಪೆ

1. _____
2. _____
3. _____
4. _____

VI Answer the following :

$1 \times 2 = 2$

1. ಅಜ್ಜಿ ದಿನಾಲು ಸಂಜೆ ಎಲ್ಲಿಗೆ ಹೋಗುತ್ತಿದ್ದರು?

2. ದೇಹಕ್ಕೆ ಒಳ್ಳೆಯ ವ್ಯಾಯಾಮ ಯಾವುದು?

vii Observe the picture and write the word in kannada 1X4=4