



Sindhi High School K.K Road, Bengaluru - 01
Worksheet - 3 (2022 - 23)
Subject : Kannada



Roll number : _____
Name : _____
Class: 2 _____ sec _____
No of printed sides : 3

Marks : 20
Date : 07 /11 /22
Time : 1 Hr

I ಅರ್ಥ ಬರೆಯಿರಿ.

$\frac{1}{2} \times 2 = 1$

ಅ) ಬದಿ - _____ ಆ) ಇಳಿ - _____

II .ವಿರುದ್ಧ ಪದಗಳನ್ನು ಬರೆಯಿರಿ.

$\frac{1}{2} \times 2 = 1$

ಅ) ಬಿಸಿಲು x _____ ಆ) ಹಿರಿಮೆ x _____

III ಪ್ರದ್ಯದಲ್ಲಿದ್ದವಂತೆ ಪ್ರಾಸ ಪದ ಬರೆಯಿರಿ.

$\frac{1}{2} \times 2 = 1$

ಅ) ಹಾಡುತ್ತು - _____ ಆ) ಮರವಿತ್ತು - _____

IV ವಚನ ಬದಲಿಸಿ ಬರೆಯಿರಿ.

$\frac{1}{2} \times 2 = 1$

ಅ) ಗೂಡು - _____ ಆ) ಪಕ್ಷಿಗಳು - _____

V ಗೆರೆ ಎಳೆದ ಅಕ್ಷರಕ್ಕೆ ಸ್ವರ, ವ್ಯಂಜನ ಬಿಡಿಸಿ ಬರೆಯಿರಿ.

$\frac{1}{2} \times 2 = 1$

ಅ) ಗಾ ಳಿ = _____ ಆ) ನೂ ರು = _____

VI ಬಿಟ್ಟ ಜಾಗ ತುಂಬಿರಿ.

1X 2 = 2

೧. ಹಲವು ಕೊಂಬೆಗಳನ್ನು _____ ತಣ್ಣೆಗಳನ್ನು ಹರಡಿತು.

೨. ಬಾಯಲಿ _____ ತಂದಿತು.

VII ಕೆಳಗಿನ ಪ್ರಶ್ನೆಗಳಿಗೆ ಒಂದು ವಾಕ್ಯದಲ್ಲಿ ಉತ್ತರಿಸಿ.

1X4=4

೧. ಹಕ್ಕಿಯ ಮರಿಗಳು ಏನೆಂದು ಹಾಡಿದವು ?

೨. ಹಳ್ಳಿಯ ದಾರಿಯ ಬದಿಯಲಿ ಏನಿತ್ತು ?

೩. ಹಕ್ಕಿಗಳು ಗೂಡನ್ನು ಎಲ್ಲಿ ಕಟ್ಟಿದ್ದವು ?

೪. ಯಾವುದು ಜನರ ಮನವನ್ನು ಸೆಳೆದಿತ್ತು ?

VIII ಕೊಟ್ಟಿರುವ ಅಕ್ಷರಗಳಿಂದ ೪ ಅರ್ಥಪೂರ್ಣ ಪದ ರಚಿಸಿ.

1X4=4

ಚಿ	ಪಿ	ಹ
ರು	ಲಿ	ಸಿ
ರಿ	ಳ	ಮ

೧. _____

೨. _____

೩. _____

೪. _____

IX ಈ ಪದವನ್ನು ಬಳಸಿ ಸ್ವಂತವಾಕ್ಯ ರಚಿಸಿ.

1X1 = 1

೧. ಮರ - _____

X ಈ ಗದ್ಯಭಾಗವನ್ನು ಓದಿ, ಸರಿಯಾದ ಉತ್ತರವನ್ನು ಆರಿಸಿ ಬರೆಯಿರಿ.

1X4=4

ಈ ನಾಯಿಮರಿ ನೋಡು, ಬಹಳ ಚೆಲುವಾಗಿದೆ. ಅದು ರಾಮು ತಂದ ಮರಿ. ಅದರ ಬಣ್ಣ ಕಪ್ಪು. ಆ ನಾಯಿಮರಿಗೆ ರಾಮು ಒಂದು ಮನೆ ಮಾಡಿರುವನು. ಊಟ, ಹಾಲು ಕೊಡುವನು. ಆ ಮರಿಗೆ ಮನೆ ಕಾಯುವುದೇ ಕೆಲಸ. ಅದು ಬಾಲ ಆಡಿಸಿ ನೆಗೆದರೆ ರಾಮುವಿಗೆ ಬಹಳ ಸಂತೋಷ.

೧. ನಾಯಿ ಮರಿಗೆ _____ ಕಾಯುವುದೇ ಕೆಲಸ.

(ಶಾಲೆ, ಮನೆ, ಊರು)

೨. ನಾಯಿಯನ್ನು ತಂದವರು _____ .

(ರಾಮು, ಶಾಮು, ಸೀನು)

೩. ಅದು _____ ಆಡಿಸಿ ನೆಗೆಯುತ್ತದೆ.

(ಕಣ್ಣು, ಬಾಲ, ಕಾಲು)

೪. ನಾಯಿಯ ಬಣ್ಣ _____ .

(ಬಿಳಿ, ಕೆಂಪು, ಕಪ್ಪು)



SINDHI HIGH SCHOOL, K.K. ROAD BENGALURU - 01

ADDITIONAL LANGUAGE HINDI

CLASS - 2 A/B/C

Worksheet - 3

Date: 03 . 11 . 2022



Name - _____ Roll no - _____

No of printed sides- 2

। दिए गए गद्यांश को पढ़कर सही उत्तर पर सही (✓) का निशान लगाओ :- (5)

Read the passage and tick the correct answer.

एक समय की बात है। एक जंगल में एक शेर और एक चूहा रहता था। एक दिन शेर सो रहा था। चूहा सोते हुए शेर के ऊपर खेलने लगा। शेर की नींद खुल गई। शेर को गुस्सा आ गया। शेर चूहे को मारना चाहा। चूहा डर गया और शेर से माफ़ी माँगी। शेर ने उसे माफ़ कर दिया।

1) जंगल में कौन - कौन रहता था ?

[शेर और चूहा () हाथी और हिरन () बंदर और लोमड़ी ()

2) एक दिन शेर क्या कर रहा था ?

[खा रहा था () खेल रहा था () सो रहा था ()

3) चूहा सोते हुए शेर के ऊपर क्या करने लगा ?

[खेलने लगा () मारने लगा () खाने लगा ()

4) शेर ने चूहे को क्या करना चाहा ?

[खाना चाहा () मारना चाहा () खेलना चाहा ()

5) चूहे ने किससे माफ़ी माँगी ?

[खरगोश से () शेर से () हिरन से ()

II इन शब्दों का अर्थ लिखो :- (1) (Write the meanings of given words in Hindi)

1) जग = _____ 2) ढलता = _____

III वाक्य बनाओ :- (Make sentences) (2)

1) खेल - _____

2) बारिश - _____

IV वाक्य पढ़कर सही (✓) या गलत (X) का निशान लगाओ (1)

1) सरदी के बाद गरमी आती है। ()

V संयुक्ताक्षर से शब्द बनाओ :- (Make new words using samyukthakshar) (2)

1) च्च - _____ 2) प्य - _____

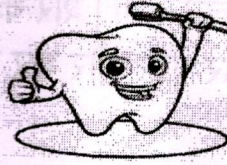

VI चित्र को उसके नाम से जोड़ो:- (Match the words with the picture)(2)

साँप

बिल्ली

चाँद

दाँत



VII ' ऋ ' की मात्रा वाले शब्दों को छाँटकर लिखो :- Identify ' ऋ ' मात्रा words and write)(2)

कूल , कृपा , पेड़ , गृह , खरगोश , किताब , पितृ , कृषि

1) _____ 2) _____ 3) _____ 4) _____

VIII विलोम शब्द लिखो :- (Write the Opposites) (2)

1) सरदी X _____ 2) ढलना X _____

3) जागना X _____ 4) हँसना X _____

IX दिए गए प्रश्नों के उत्तर लिखो:- (Answer the following)

1) सूरज कब ढलता है ? (1)

2) संसार में किसका नाम होता है ? (2)



SINDHI HIGH SCHOOL, K.K.ROAD, BENGALURU -01

WORKSHEET – 3 (2022-23)

SUB : MATHEMATICS

No.of printed sides -2



Name : _____

Date : 4/11/22

Class : 2 A/B/C

Time : 1 hour

Roll no : _____

Marks : 20

1) Complete the following :

(1x5=5)

a) A square has _____ sides .

b) The letter V has _____ slanting lines.

c) A sphere has a _____ face.

d) A _____ has 3 sides and 3 corners.

e) A ball is an example of a _____ . (circle / sphere)

2) Name the following :

(1x3=3)

a) A plane shape with no corners.

b) Any 2 alphabets made up of only curved lines.

c) An example of a cuboid





3) What comes next in the pattern ?

(1x4=4)

a) 1A, 2B, 3C, _____, _____



b) 95, 85, 75, _____, _____

c) 47, 49, 51, _____, _____

d)  ,  ,  ,  , _____, _____


4) Join the letters and name the type of line formed


(1x2=2)



5) Write the names of the solid shapes

(1x2=2)






6) Draw any 2 plane shapes and write a property of each


(2x2=4)

a)




Property : _____

b)



Property : _____



Name _____:

Roll No _____

Class 2/ Section: _____

Number of printed sides: 3

Date: 8/11/2022

Marks: 20

Time: 1 hour

Section A - Reading

Read the following passage carefully and answer the questions given below:

(1 x 5 = 5)

Sheela loves dogs. She thinks they are the cutest of all animals. When she plays ball with her dog, she throws it to him and he catches it every time. He follows her everywhere she goes. He likes to be taken for a walk every morning and evening. If he smells a stranger, he starts barking loudly. Dogs are man's best friend.

a. Complete the following sentences:

- i. Sheela thinks dogs are _____
- ii. If he smells a stranger, _____

b. Answer the following questions:

- i. What does the dog do when Sheela throws a ball to him?


- ii. Who is man's best friend?

- iii. Where does her dog follow her?

Section B – Creative Writing and Grammar

1. Look at the picture and write three sentences about it. (3 marks)

PICNIC TIME



2. Use the following words in sentences of your own: (1 x 2 = 2)

a. enjoy-

b. mistake-

Grammar

3. Use articles 'a' or 'an' to fill in the blanks: (1/2 x 4 = 2)

Ravi and his friends went to _____ camp. They saw _____ elephant carrying _____ log of wood. They took _____ photo of the elephant and were happy.

4. Identify the underlined nouns as proper nouns or common nouns: (1/2 x 4 = 2)

a. My brother's name is Sam.

brother- _____ Sam- _____

b. Delhi is in India.

Delhi- _____ India- _____

Section C - Literature

1. Answer the following questions:

(1 x 3 = 3)

a. How is English learnt at school?

Ans. _____

b. Why did Mohan have to spend the night on the road?

Ans. _____

c. What do we learn from the lesson 'Finding Happiness'?

Ans. _____

2. Complete the following sentences :

(1 x 2 = 2)


a. Mohan always _____ to God for something or the other.

b. I am happy to go to school from _____ to _____.

3. Rearrange the jumbled words to make a meaningful sentence:

(1 mark)

a. small hut / the man's / was a / house



SINDHI HIGH SCHOOL, K. K. Road, Bengaluru-01

EVS worksheet-3(2022-23)



Name _____
Roll No _____

Class 2/ Section: _____ Number of printed sides: 2

Time: 1 hour

I Choose the correct answer:

($\frac{1}{2} \times 5 = 2\frac{1}{2}$)

1. Food that prevents us from falling ill is called _____
a. body building food b. protective food
2. Clean and pure water that is fit for drinking is called as _____
a. potable water b. sea water
3. People who eat fruits and vegetables are called _____
a. vegetarians b. non vegetarians
4. Dirty water contains _____
a. germs b. stones
5. _____ is the source of water.
a. Lake b. Rain

II Give two examples for each of the following:

($1 \times 2 = 2$)

1. Energy giving food : _____, _____
2. Water sports activity : _____, _____

III Match the following:

($\frac{1}{2} \times 4 = 2 M$)

- | | | |
|-----------------------|-----|---------------|
| 1. leaking tap | () | a. meat, fish |
| 2. body building food | () | b. repair |
| 3. non vegetarian | () | c. water |
| 4. ponds, lakes | () | d. milk, nuts |

IV Write True Or False :

($\frac{1}{2} \times 5 = 2 \frac{1}{2}$ M)

- 1) Milk makes our bones and teeth strong. _____
- 2) The water in the seas and oceans is sweet. _____
- 3) We should wash our hands with soap before eating food. _____
- 4) Store rainwater in drums, buckets and bottles to use later. _____
- 5) We should have good food habits to stay unhealthy. _____

V. Write short notes on:

(2x2=4)

1. Water:

3. Good eating habits:

VI) Answer The Following :

(1 x 3 = 3M)

1) Why should we eat food?

A. _____

2) What is a balanced diet?

A. _____

3) What is underground water?

A. _____


VII) Draw and colour the Following :

(2 x 2= 4 M)

Write one sentence about each

A) Protective food

B) Hand pump



SINDHI HIGH SCHOOL, BENGALURU-01
English Worksheet 2(2022-2023)

Name _____
Roll No _____
Class 2/ Section: _____

Date: 20/09/2022
No of Printed sides: 4
Marks: 20
Time: 1 Hour

SECTION-A READING

I. Read the following passage and fill in the blanks with the correct option: (1 x 5 = 5)

Once upon a time there lived a hungry mouse. He had no food for many days. He looked everywhere to find food. One day he found a basket with cheese. There was a small hole in the basket. He entered the basket through the hole and started eating up all the cheese. After sometime the mouse became very fat and he was not able to come out of the basket through the small hole. A rabbit who saw the mouse trying to come out laughed at the mouse and said that he needs to become thin to come out of the basket. The mouse became very sad and was stuck up in the basket.

a. What did the mouse do to find food?

-
- (i) Went to the market
 - (ii) Asked his friend
 - (iii) Looked everywhere
 - (iv) Asked his mother

b. How did the mouse enter the basket?

-
- (i) By jumping into it
 - (ii) Through the hole
 - (iii) His friends helped him in
 - (iv) His mother showed him the way

c. What did the mouse find in the basket?

- (i) cheese
- (ii) chocolates
- (iii) carrot
- (iv) apples

d. Who saw the mouse trying to come out of the basket?

- (i) cat
- (ii) rabbit
- (iii) ant
- (iv) spider

e. What happened when the mouse ate up all the cheese?

- (i) he went to sleep
- (ii) he started dancing
- (iii) he became very fat
- (iv) he wanted more

SECTION-B CREATIVE WRITING & GRAMMAR

II. Write five sentences describing your favourite food :

(5 Marks)




III. Write the names with the help of the pictures of blends and diagraphs:(1/2x8=4)

1. sm _____



5. Ch _____



2. sp _____



6. Th _____



3. wh _____



7. Sn _____



4. st _____



8. Ph _____



SECTION C – LITERATURE

IV. Answer the following questions:

(1x3=3)

a.) What did Bheem exchange the goat for?

Ans.

b.) How do our eyes help us ?

Ans.

c.) What did Bheem do with the money he got after selling the hen?

Ans.

V. Frame sentence with:

(1)

1. kindness-

VI. Choose the correct answer from the bracket:

(1x2=2)

- a.) On the way to the _____, Bheem met a man with a horse. (village, market)
b.) We must thank God to be blessed with a home and a _____. (car, family)

Handwritten marks and scribbles at the bottom left corner.



SINDHI HIGH SCHOOL, K.K. ROAD BENGALURU - 01

ADDITIONAL LANGUAGE HINDI

CLASS – 2 A/B/C

Worksheet – 2

TIME – 1hr

Date: 21.9.2022

MARKS – 20

Name - _____ Roll no - _____ No of printed sides- 2

। निम्नलिखित गद्यांश को पढ़कर सही उत्तर पर सही (✓) का निशान लगाइए ।

Read the given passage and tick the correct answer .(5)

मंदिर के पास एक लड़का रहता था । उसका नाम रामू था । वह पेड़ से लकड़ी काटकर खिलौने बनाता था । उसकी एक बहन थी ,उसका नाम था कंचन । कंचन रोज़ बाज़ार जाकर खिलौने बेचती थी । शाम को दोनों मिलकर खेलते थे ।

1. _____ के पास एक लड़का रहता था ।

(मंदिर जंगल पेड़)

2. लड़के का नाम _____ था ।

(शाम रमेश रामू)

3. रामू लकड़ी काटकर _____ बनाता था ।

(घर खिलौने कलम)

4. रामू की _____ का नाम कंचन था ।

(माता बहन मौसी)

5. कंचन रोज़ _____ जाकर खिलौने बेचती थी ।

(जंगल बाज़ार मेला)

II लिंग बदलो (Change the gender) (2)

1) मोर - _____ 2) कौआ - _____

3) घोडा - _____ 4) मौसा - _____

III वचन बदलो (Change into plurals) (2)

1) पौधा - _____ 2) पंखा - _____

3) अंडा - _____ 4) झंडा - _____

IV विलोम शब्द लिखो (Write the opposites) (2)

1) अंदर x _____ 2) गंदा x _____

3) जागना x _____ 4) ठंडा x _____

V वाक्य बनाओ (Make sentences) (2)

1) सुंदर -

2) मोर -

VI दसखडी लिखो :- (2x2=4)

1. क - का कि _____ कु _____ कृ के _____ को _____



2. न - ना _____ नी नु _____ नृ _____ नै _____ नौ

VII तुक शब्द लिखो (Write the Rhyming words) (1)

1. रोटी - _____ 2. पैर - _____

VII चित्र पहचान कर उसका नाम हिंदी में लिखो :- (2)

Identify the picture and write their names in Hindi





Name _____

Roll No _____

Class 2 Section _____

Number of printed sides: 3

Date: 19/10/22

Marks: 20

Time: 1 hour

1) Complete the following:

a) $17 + 0 =$ _____

b) In the word CELEBRATION, R is in _____ position

c) $23 +$ _____ $= 24$

d) $7 + 6 + 5 =$ _____

e) $18 +$ _____ $+ 10 = 23 + 10 + 18$

f) 52, 62, _____, _____ (skip count by 10's)



There are _____ mangoes but the apple is in _____ place.

2) Add the following:

(1x3=3)

a)	T O	b)	T O	c)	H T O
	2 3		4 5		7 0 5
	<u>+ 5 2</u>		<u>+ 3 5</u>		<u>+ 2 6 4</u>
	_____		_____		_____

3) Arrange the numbers in column and write the answer:

(1x2=2)

a) $66 + 12 =$ _____

b) $45 + 36 =$ _____

4) Complete the table by forward skip counting by 3's: (1/2X4=2)

15		21		27
30		36	39	

5) Story Sums:

(2X3=6)


1. In a village there are 154 Women and 235 Men. How many people are there in the village?

A. _____

2. Tanu bought 46 story books in the month of March and 14 story books in the month of May. How many books did she have in total?

A _____

Fill in the blanks with ordinal number spelling:



1. The Parrot is in the _____ Place.

2. The Rabbit is in the _____ place.

3. The Sheep is in the _____ place but snail is in the _____ place.



Sindhi High School K.K Road, Bengaluru - 01
Worksheet - 2 (2022 - 23)
Subject : Kannada

Roll number : _____
Name : _____
Class: 2 _____ sec _____
No of printed sides : 3

Marks : 20
Date 23/09/22
Time : Hr

I ಅರ್ಥ ಬರೆಯಿರಿ.

$\frac{1}{2} \times 2 = 1$

ಅ) ಜಂಬ - _____ ಆ) ಗುಡಿ - _____

II ವಿರುದ್ಧ ಪದಗಳನ್ನು ಬರೆಯಿರಿ.

$\frac{1}{2} \times 2 = 1$

ಅ) ಹತ್ತಿರ x _____ ಆ) ಗೌರವ x _____

III ಲಿಂಗ ಬದಲಿಸಿ ಬರೆಯಿರಿ.

$\frac{1}{2} \times 2 = 1$

ಅ) ರಾಜ - _____ ಆ) ಹೆಂಡತಿ - _____

IV ವಚನ ಬದಲಿಸಿ ಬರೆಯಿರಿ.

$\frac{1}{2} \times 2 = 1$

ಅ) ಕೆರೆ - _____ ಆ) ಕಾಡುಗಳು - _____

V ಬಿಟ್ಟ ಅಕ್ಷರ ಬರೆಯಿರಿ.

$\frac{1}{2} \times 2 = 1$

ಅ) ಬ್ + ಎ = _____ ಆ) ಹ್ + ಓ = _____

VI ಈ ಪದವನ್ನು ಬಳಸಿ ಸ್ವಂತವಾಕ್ಯ ರಚಿಸಿ.

1X1 = 1

೧. ದಾನ - _____

VII ಸರಿಯಾದ ಉತ್ತರವನ್ನು ಆರಿಸಿ ಬಿಟ್ಟ ಜಾಗ ತುಂಬಿರಿ.

1X4=4

೧. ಉಪ್ಪಿಗಿಂತ ರುಚಿಯಿಲ್ಲ, ತಾಯಿಗಿಂತ _____

(ಬಂಧುವಿಲ್ಲ, ಚಿಕ್ಕವರಿಲ್ಲ, ಜಾಣರಿಲ್ಲ)

೨. ಕೆಂಪೇಗೌಡರು _____ ಗಳನ್ನು ತನ್ನ ಮಕ್ಕಳಂತೆ ಪ್ರೀತಿಸುತ್ತಿದ್ದರು.

(ಮಂತ್ರಿ, ಪ್ರಜೆ, ಗುರು)

೩. ಓಟದ ಸ್ಪರ್ಧೆಯಲ್ಲಿ ಮೊದಲ ಸಲ ಗುರಿ ಮುಟ್ಟಿದವರು _____

(ಬಂಟೆ, ಕುದುರೆ, ಆನೆ)

೪. ಕಸುಬುದಾರರಿಂದ _____ ಬೆಳೆದವು.

(ಕೈಗಾರಿಕೆ, ಶಾಲೆ, ಪ್ರೀತಿ)

VIII ಕೆಳಗಿನ ಪ್ರಶ್ನೆಗಳಿಗೆ ಒಂದು ವಾಕ್ಯದಲ್ಲಿ ಉತ್ತರಿಸಿ.

1X4=4

೧. ಯಾರು ಯಾರು ಒಳ್ಳೆಯ ಗೆಳೆಯರಾಗಿದ್ದರು?

೨. ನಮ್ಮ ರಾಜ್ಯದ ರಾಜಧಾನಿ ಯಾವುದು?

೩. ಆನೆಯು ಎರಡನೆಯ ಸಲ ಓಟದ ಆಟವನ್ನು ಎಲ್ಲಿ ಏರ್ಪಡಿಸಿತು?

೪. "ನಾವಿಬ್ಬರೂ ಸಮಾನರು ಅಲ್ಲವೇ" ? ಈ ಮಾತನ್ನು ಯಾರು ಯಾರಿಗೆ ಹೇಳಿದರು?

IX ಈ ಅಕ್ಷರಗಳನ್ನು ಸರಿಯಾಗಿ ಜೋಡಿಸಿ ಬರೆಯಿರಿ.

$\frac{1}{2} \times 2 = 1$

೧. ಲಸಹೆ - _____

೨. ಯುಳ್ಳೆ - _____

X ಈ ಕೆಳಗಿನ ವಾಕ್ಯಗಳು ಸರಿ ಅಥವಾ ತಪ್ಪು ಎಂಬುದನ್ನು ಗುರುತಿಸಿ.

$\frac{1}{2} \times 2 = 1$

೧. ಕೆಂಪೇಗೌಡರ ತಾಯಿಯ ಊರು ಬೆಂಗಳೂರೇಂಬ ಹಳ್ಳಿ.

೨. ಕೆಂಪಾಂಬುಧಿ ಕೆರೆಯನ್ನು ಅಚ್ಯುತರಾಯರು ಕಟ್ಟಿಸಿದರು.

XI ಕೊಟ್ಟಿರುವ ಅಕ್ಷರಗಳಿಂದ ೪ ಅರ್ಥಪೂರ್ಣ ಪದರಚಿಸಿ.

$1 \times 4 = 4$

ಹ	ಳ್ಳಿ	ತ್ರಿ
ಮಂ	ಸು	ವ
ಗ್ಗ	ಶಿ	ಬ್ಬ

೧. _____

೨. _____

೩. _____

೪. _____



EVS worksheet-2(2022-23)

Name _____

Roll No _____


Class 2/ Section: _____

Number of printed sides: 2

Date: 22/9/2022

Marks: 20

Time: 1 hour



I) Fill In The Blanks : (½ x 4 = 2 M)

1) _____ houses are also called as temporary houses .

2) Living in a clean house keeps us free from _____ .

3) We post letters in the _____ .

4) A tent is a house made up of _____ .

II) Match The Following : (½ x 4 = 2 M)

- | | | |
|---------------|-----|-----------------|
| 1) Caravan | () | a. Tourists |
| 2) Stamps | () | b. Fire station |
| 3) Hose pipes | () | c. Nomads |
| 4) Houseboat | () | d. Post office |

III) Write True Or False : (½ x 4 = 2 M)

1) Eskimos live in pucca house. _____

2) We should not keep our surroundings clean. _____

3) Early man lived in caves. _____

4) Police controls the traffic on road. _____

IV) Who Am I ? (1 x 3 = 3 M)

1) I am made up of snow or blocks of ice - _____

2) Children play and elders relax here - _____

3) Sick and injured people are treated here - _____

(4 x 1 = 4 M)

V) Answer The Following :

1) Who are neighbours?

A. _____

2) What is a market?

A. _____

3) What is a menu card?

A. _____

4) Why do we need a house?

A. _____

VI) Name The Following :

(3 x 1 = 3M)

1) National park - _____

2) To call the police dial - _____

3) The largest hotel in India - _____

VII) Draw , Colour And Label The Following :

(2 x 2 = 4 M)

A) Houseboat

B) Pucca house