



SINDHI HIGH SCHOOL, KK ROAD, BENGALURU.
English Worksheet I- 2022-23

Name _____
Roll No. _____
Class 2/Section _____

Date: 13/07/2022
Marks: 20
Time: 1 hour

No. of printed sides: 4

Section A -Reading

A. Read the following passage and fill in the blanks with the correct option :

(1 x 5=5)

My name is Harry. I'm so happy as the weekend is here. Every Saturday my parents take me to the park along with my pet dog, Bruno. He is black in colour. When I play at the swing and the slides, Bruno barks happily. I keep waiting all week long to meet my friends, Paul and Sally, at the park. Our parents buy us chocolates and candy. It is a day well spent.

1. On which day of the week does Harry go to the park?

- _____
- a. Monday b. Wednesday c. Friday d. Saturday

2. When Harry's parents take him to the park who goes along with him?

- _____
- a. brother b. sister c. pet dog d. neighbours

3. At the park, Harry plays on

- _____
- a. the merry go round b. the swing and slides c. the toy ride
d. the slides

4. Name Harry's two friends whom he meets at the park every week.

- a. Tom and Harry b. Sam and Tom c. Paul and Sally
- _____

5. While at the park, Harry feels

a. sad

b. happy

c. excited

d. fearful

Section B – Grammar and Creative Writing

1. Arrange the following in alphabetical order: (1x2=2)

a. eyes, bottle, horse, red,

a. _____

b. second, food, aeroplane, carry,

b. _____


2. Write the correct vowel to complete each word: (1/2x 2= 1)

a.



_____pple

b.




fl____wers

3. Frame a sentence with the given word: (1 mark)

1. help :-

4. Write 5 sentences about your school. (5 marks)



Section C - Literature

1. Answer the following questions: (1 x 4 = 4)

a. Why was Lily sad?

Ans: _____

b. When does the child go to the market?

Ans: _____

c. Which competition did Lily take part in?

Ans: _____

d. Name any 2 yummy fruits which make the child hungry.

Ans: _____

2. Choose the correct answer:

(1 x 2 = 2)

a. In front of Rose's cottage there lived a _____ family. (rich, poor)

b. Shopping is fun with my _____. (mother, father)

Section A

1. d.
2. c.
3. b.
4. Paul and Sally
5. B.

Section B

- 1.a. bottle, eyes, horse, red
b. aeroplane, carry, food, second
- 2.a. apple
b. flowers
3. Correct grammar while using the word help in a sentence
4. Key points
 - *Name of the school
 - *A place to learn new things
 - *A place to make n meet friends
 - *Liking towards the school

Fluency and vocabulary 2marks

Content 3marks

Section C

- 1a. Lily was sad because she thought she would not be able to go to school.
 - b. The child goes to the market on every Sunday.
 - c. Lily took part in an English Essay writing competition.
 - d. Oranges, apples and grapes ...any 2 fruits
- 2.a. poor
 - b. mother



Sindhi High School KK Road ,Bengaluru
Work sheet __ 1 (2022 - 23)
Subject : Kannada

Roll number : _____

Name : _____

Class: 2 _____ sec

Marks : 20

Date :12 .7.22

Time

೧. ಅರ್ಥ ಬರೆಯಿರಿ: Write the meanings for these words ೧×೨=೨

೧. ನೆತ್ತಿ = _____

೨. ಪುಚ್ಚ = _____

೨. ವಿರುದ್ಧ ಪದ ಬರೆಯಿರಿ: Write opposites for these words

೧×೨=೨

೧. ಮುಗಿಲು × _____

೨. ಬಾ × _____

೩. ಲಿಂಗ ಬದಲಿಸಿ: Write the other gender _____

೧×೨=೨

೧. ಅವ್ವ _____

೨. ಗೆಲೆಯ _____

೪. ವಚನ ಬದಲಿಸಿ : Write one and many _____

೧×೨=೨

೧. ನಾನು = _____

೨. ಗೆಲೆಯರು = _____

೫. ಅಕ್ಷರಗಳನ್ನು ಸರಿಯಾಗಿ ಜೋಡಿಸಿ ಬರೆಯಿರಿ : Write the correct word

೧×೨=೨

೧. ಗೆರಿನೀ = _____

೨. ಗಿಹನುಹೋ = _____

೬. ಉತ್ತರಿಸಿ: Answer the following questions _____

೧×೨=೨

೧. ಮಗು ತಿನ್ನಲು ಏನು ಕೊಡುವೆ ಎಂದಿತು?
ಉತ್ತರ:

ಪುಟ ೧

೧. ಅವ್ಯ ಎಲ್ಲಿಗೆ ಹೋಗಿಹಳು ?

ಉತ್ತರ: _____

೨. ಮಗು ಇಬ್ಬರು ಕೂಡಿ ಯಾವ ಕಡೆಗೆ ಹಾರುವ ಎಂದಿತು?

ಉತ್ತರ: _____

೨. ಸರಿಯಾದ ಉತ್ತರವನ್ನು ಆರಿಸಿ ಬಿಟ್ಟು ಜಾಗ ತುಂಬಿರಿ: $೧ \times ೪ = ೪$
Choose the correct answer and fill in the blanks

೧. ಹಕ್ಕಿಗೆ _____ ಮೇಲೆ ಜುಟ್ಟು ಇದೆ (ಬತ್ತಿ, ಹತ್ತಿ, ನೆತ್ತಿ)

೨. ನನಗೂ _____ ರೆಕ್ಕೆಯ ಹಚ್ಚು (ಎರಡು, ಮೂರು, ನಾಲ್ಕು)

೩. 'ಅ' ಇಂದ 'ಔ' ವರೆಗಿನ ಅಕ್ಷರಗಳನ್ನು _____ ಎನ್ನುವರು
(ವ್ಯಂಜನಗಳು, ಸ್ವರಗಳು, ಯೋಗವಾಹಗಳು)

೪. ಒಂದು ವ್ಯಂಜನ + ಒಂದು ಸ್ವರ ಸೇರಿದರೆ _____ ಆಗುತ್ತದೆ.
(ಒತ್ತಕ್ಷರ, ಅಕ್ಷರಮಾಲೆ, ಕಾಗುಣಿತ)

೫. ಗೆರೆ ಎಳೆದ ಅಕ್ಷರಗಳ ಸ್ವರ,ವ್ಯಂಜನ ಬಿಡಿಸಿ ಬರೆಯಿರಿ: Spilt the
letter which is under lined $೧ \times ೨ = ೨$

೧. ನೀರಿಗೆ = _____ ೨. ಹೋಗಿಹನು = _____

೬. ಬಿಟ್ಟು ಅಕ್ಷರ ಬರೆಯಿರಿ: Fill the letters $1/2 \times ೨ = ೧$

೧. ಮ್ + ಓ = _____ ೨. ವ್ + ಊ = _____



SINDHI HIGH SCHOOL ,K K ROAD ,BENGALURU .
WORKSHEET -1 (2022-23)

CLASS : 2 A /B /C

Marks: 20

No of Printed Sides: 2

Name: _____ Roll No: _____

SUBJECT: HINDI (Add Lang)

Time: 1hr

Date: 14 / 7 /2022

I Read the passage and fill in the blanks . (5)

राम के घर महेश आए । राम बाज़ार जाकर आम ला । शिखा आम काटकर ला ।
रमेश आम खा । सभी ने मिलकर रेल का खेल खेला । राम शरबत ला । सब शरबत पीकर
खुश हुए ।

- 1) राम के घर _____ आए ।
- 2) राम _____ जाकर आम ला ।
- 3) _____ आम काटकर ला ।
- 4) सभी ने मिलकर _____ का खेल खेला ।
- 5) सब _____ पीकर खुश हुए ।

II Write the Opposites :-

(2)

- 1) आना x _____ 2) दिन x _____
- 3) दूर x _____ 4) इधर x _____

III Change the Gender:-

(2)

- 1) नाना - _____ 2) लड़का - _____
- 3) हिरन - _____ 4) शेर - _____

IV Change into Plurals :-

(2)

1) छाता - _____ 2) चूहा - _____

3) केला - _____ 4) जूता - _____

(3)

V Make Sentences :-

1) सूरज - _____

2) शेर - _____

3) चिड़िया - _____

(2)


VI Write the Rhyming words :-


1) कार - _____ 2) आलू - _____


2) रेल - _____ 4) केला - _____


VII Look at the picture and circle the correct word:-

(2)

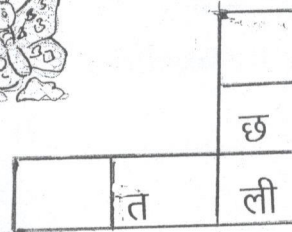
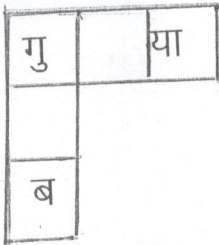
 - विमान सेब छाता आम

 - नाक कान हाथ नयन

 - गुलाब चुहिया तितली केला

 - माला लड़की जामुन पेड़

VIII Fill in the crosswords with the help of the pictures given. (2)





SINDHI HIGH SCHOOL K K Road, Bengaluru-01

Mathematics worksheet-1(2022-23)

Name _____

Date: 11/07/2022

Roll No _____

Marks: 20

Class 2 Section _____

Number of printed sides: 2

Time: 1 hour

1) Complete the following: (1x2=2)

a) The number after 115 is _____

b) The largest 2 digit number is _____

2) Write the numerals: (1x2=2)

a. Two hundred twenty five- _____

b. Eight hundred eighty- _____

3) Write the number name for the given numbers: (1X2=2)

a) 172- _____

b) 320- _____

4) Write the short form of the numbers: (1X2=2)

a) $400+90+7=$ _____

b) $600+20+6=$ _____

5) Draw the abacus for the given number: (1X2=2)

a.135

b. 242

6) Compare the numbers using $>$, $<$, $=$: (1/2X4=2)

a) 355 _____ 232

b) 625 _____ 225

(1X2=2)

7) Arrange the numbers in ascending order:

a) 735, 320, 150, 545

A. _____

B) 435, 127, 278, 329

A. _____

8) Draw the place value chart for the given number and write their number names: (2X2=4)

a) 886

b) 397

9) Fill in the missing numbers:

(1X2=2)

a) 166, 167, _____, 169, _____

b) 633, _____, 635, 636, _____



Name _____

Roll No _____

Class 2 Section _____

Number of printed sides: 2

(1x2=2)

1) Complete the following:

a) The number after 115 is _____

b) The largest 2 digit number is _____

(1x2=2)

2) Write the numerals:

a. Two hundred twenty five- _____

b. Eight hundred eighty- _____

(1x2=2)

3) Write the number name for the given numbers:

a) 172- _____

b) 320- _____

(1x2=2)

4) Write the short form of the numbers:

a) $400+90+7=$ _____

b) $600+20+6=$ _____

(1x2=2)

5) Draw the abacus for the given number:

a. 135

b. 242

6) Compare the numbers using $>$, $<$, $=$:

a) 355 _____ 232

b) 625 _____ 225

c) 300 _____ 300

705

(1/2x4=2)

(1X2=2)

7) Arrange the numbers in ascending order:

a) 735, 320, 150, 545

A. _____

B) 435, 127, 278, 329

A. _____

8) Draw the place value chart for the given number and write their number names: (2X2=4)

a) 886

b) 397

9) Fill in the missing numbers:

(1X2=2)

a) 166, 167, _____, 169, _____

b) 633, _____, 635, 636, _____